



# DELHI PUBLIC SCHOOL

SAIL Township, Ranchi

SECOND SEMESTER EXAMINATION (SESSION-2022-23)

**SUBJECT:** EVS

**DATE :-** 25.02.2023

**CLASS:** – I **Sec:-** \_\_\_\_\_

**Time:** 2 Hours

**M.O. :-** \_\_\_\_\_

**Roll no.:-** \_\_\_\_\_

**F. M. :-** 40

**NAME:-** \_\_\_\_\_

**I. Circle the correct answer :- (1x10=10)**

1. We go to a bank / restaurant to eat.
2. Farmers / Doctors treat people who are sick.
3. Eid / Christmas is celebrated on 25th December.
4. Canoes/Trams move on tracks.
5. Mint / Grapevine is a climber.
6. A frog / horse lives on land as well as in water.
7. The stars / clouds are like balls of cotton.
8. We go to a post office / police station to buy stamps.
9. Gandhi Jayanti is celebrated on 2ndOctober/ 3<sup>rd</sup>October.
10. On Gurupurab/Christmas we pray to the Guru Granth Sahib.

**II. Fill in the blanks by choosing the correct word from the help box:-**

**(0.5x3= 1.5)**

mason , bank , green grocer

1. Our money is safe in a \_\_\_\_\_.
2. A \_\_\_\_\_ helps in building a house.
3. A \_\_\_\_\_ sells fruits and vegetables.

**III. Fill in the blanks :-**

**(1x3=3)**

1. \_\_\_\_\_ is a free meal served in a Gurdwara.

2. \_\_\_\_\_ is celebrated on 15th August every year.

3. We go to a \_\_\_\_\_ when we are ill.

**IV. Match the two columns :-**

**(0.5 x4 = 2)**

- |               |         |                          |
|---------------|---------|--------------------------|
| 1. wool       | rockets | <input type="checkbox"/> |
| 2. plumber    | queue   | <input type="checkbox"/> |
| 3. bus stop   | taps    | <input type="checkbox"/> |
| 4. astronauts | sheep   | <input type="checkbox"/> |

**V. Write 'T' for true and 'F' for false :**

**(0.5x3=1.5)**

- |   |                          |
|---|--------------------------|
| 1. Plants need water to live.           | <input type="checkbox"/> |
| 2. Dark clouds bring rain.              | <input type="checkbox"/> |
| 3. An auto stand is a place of worship. | <input type="checkbox"/> |

**VI. Write short answers :-**

**(1x3=3)**

1. Why do we celebrate all festivals?

---

---

2. What are stray animals?

---

---

3. Why can't creepers climb on the wall or on a stick ?

---

---

**VII. Answer in one word:-**

**(1x4=4)**

1. You see me at night. My shape keeps changing. Who am I ?

---

2. Which animal pulls the sledge of Santa Claus?

---

3. Which part of the plant prepares food for it?

\_\_\_\_\_

4. Name one vehicle pulled by animals.

\_\_\_\_\_

**VIII. Name two:-**

**(0.5 x 6 = 3)**

1. Animals we keep as pets .

a) \_\_\_\_\_ b) \_\_\_\_\_.

2. Birds that cannot fly very high.

a) \_\_\_\_\_ b) \_\_\_\_\_.

3. Creepers.

a) \_\_\_\_\_ b) \_\_\_\_\_.

**IX. Answer in complete sentences :**

**(2x5=10)**

1. Write two good manners and habits.

\_\_\_\_\_  
\_\_\_\_\_  
\_\_\_\_\_  
\_\_\_\_\_

2. How do plants make their food?

\_\_\_\_\_  
\_\_\_\_\_  
\_\_\_\_\_  
\_\_\_\_\_

3. What are domestic animals? Give two examples.

\_\_\_\_\_  
\_\_\_\_\_  
\_\_\_\_\_  
\_\_\_\_\_

4. List two ways how we can save water.

---

---

---

---

5. When do we see a rainbow?

---


---

---

---

**X. Draw, colour and label any one insect.**

**(0.5+0.5+1=2)**





# DELHI PUBLIC SCHOOL

SAIL Township, Ranchi

SECOND SEMESTER EXAMINATION (SESSION-2022-23)

SUBJECT: HINDI

CLASS: – I Sec:- \_\_\_\_\_

Roll no.:- \_\_\_\_\_

Time: 2 Hours

DATE :- 23.02.2023

M.O. :- \_\_\_\_\_

F. M. :- 40

NAME:- \_\_\_\_\_

## I. सही उत्तर चुनकर (✓) लगाएँ :-

[0.5x4=2]

1. पतंग का अनेक शब्द है –

(क) पतंगे

(ख) पतगे

(ग) पंतगे

(घ) पतंगें

2. हर चीज़ में कुछ न कुछ ..... होता है।

(क) रंग

(ख) गुण

(ग) ऊँचा

(घ) मीठा

3. फौरन का अर्थ है –

(क) बलवान

(ख) दुर्बल

(ग) तुरंत

(घ) बढ़िया

4. आम से बनता है –

(क) पालक

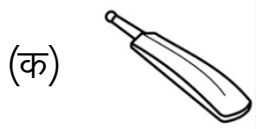
(ख) खबर

(ग) त्यौहार

(घ) अचार

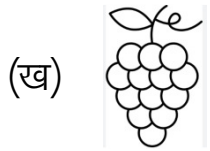
## II. सही मिलान करें :-

[0.5x4=2]



बल्ला

न् + न



गुच्छा

क् + ख



मक्खन

च् + छ



अन्न

ल् + ल

## III. सही मात्रा लगाएँ :-

[0.5x4=2]

1. काफी – ( ॰ / ॱ )

2. चाद – ( ॰ / ॱ )

3. पाव – ( ॰ / ॱ )

4. बाल – ( ॰ / ॱ )

**IV. सही मिलान करें :**

**[0.5x4=2]**

- |            |            |                          |
|------------|------------|--------------------------|
| (1) नुकीले | (क) स्वामी | <input type="checkbox"/> |
| (2) राजा   | (ख) टीका   | <input type="checkbox"/> |
| (3) तिलक   | (ग) भारी   | <input type="checkbox"/> |
| (4) हल्का  | (घ) तेज़   | <input type="checkbox"/> |

**V. (i) दिए गए शब्दों को अंक में लिखें :-**

**[0.5x4=2]**

- (1) चार - ..... (2) सात - .....

**(ii) दिए गए अंकों को शब्द में लिखें :-**

- (1) ५ - ..... (2) ६ - .....

**VI. चित्र देखकर प्रश्नों के उत्तर लिखें :-**

**[0.5x4=2]**



बच्चे , कूद , मजे , बाग

1. यह दृश्य एक ..... का है।
2. बाग में ..... खेल रहे हैं।
3. एक लड़की रस्सी ..... रही है।
4. सभी बच्चे बहुत ..... कर रहे हैं।

**VII. दिए गए शब्दों के स्त्रीलिंग लिखें :-**

**[1x2=2]**

- (1) चूहा - ..... (2) बंदर - .....

**VIII. खाली स्थान में सही शब्द चुनकर लिखें :-**

**[1x2=2]**

हरा , उड़ , उसे

(1) तितली ..... रही है।

(2) वह पेड़ ..... है।

**IX. दिए गए गद्यांश को पढ़कर प्रश्नों के उत्तर एक शब्द में लिखें :-**

**[1x3=3]**

एक गाँव में दो बिल्लियाँ रहती थीं। वे आपस में मेल से रहती थीं। एक दिन उन्हें एक रोटी मिली। उसे बराबर-बराबर बाँटते समय उनमें झगड़ा हो गया। एक कहती थी कि तुम्हारी रोटी का टुकड़ा बड़ा है और दूसरी कहती थी कि मेरा टुकड़ा बड़ा नहीं है।

1. एक गाँव में कितनी बिल्लियाँ रहती थीं ?

.....

2. रोटी-बाँटते समय उनमें क्या हो गया ?

.....

3. 'बड़ा' शब्द का उल्टा शब्द लिखें :-

.....

**X. प्रश्नों के उत्तर एक शब्द में लिखें :-**

**[1x5=5]**

1. चिड़ा और चिड़िया के कितने अंडे थे ?

.....

2. फलों का राजा कौन कहलाता है ?

.....

3. कौन सूट पहनकर आया ?

.....

4. बस अपने साथ किसका नाम लेकर आई ?

.....

5. शेख चिल्ली बचपन से ही क्या देखता था ?

.....

**XI. वाक्य बनाएँ :-**

**[1x3=3]**

- (1) मस्ती – .....
- (2) आँख – .....
- (3) पसंद – .....

**XII. किसने, किससे कहा :-**

**[0.5x4=2]**

- (1) 'भई वाह, मेरे क्या कहने!' – .....
- (2) "धम्मक, आज तो तुम्हें मेरे साथ शर्त लगानी होगी" – .....

**XIII. प्रश्नों के उत्तर लिखें :-**

**[1.5x4=6]**

1. कौआ पानी ढूँढने कहाँ-कहाँ गया ?

2. एक दिन उँगलियों में किस बात पर लड़ाई हुई ?

3. शेर के दहाड़ने पर बंदर ने क्या किया ?

4. शेख चिल्ली ने क्या बनने का सपना देखा ?

**XIV. 'होली' अथवा 'भारत दर्शन' विषय पर पाँच वाक्य लिखें :-**

**[1x5=5]**





# DELHI PUBLIC SCHOOL

SAIL Township, Ranchi

SECOND SEMESTER EXAMINATION (SESSION-2022-23)

**SUBJECT:** English

**DATE :-** 21.02.2023

**CLASS: – I Sec:-** \_\_\_\_\_

**Time:** 2 Hours

**M.O. :-** \_\_\_\_\_

**Roll no.:-** \_\_\_\_\_

**F. M. :-** 40

**NAME:-** \_\_\_\_\_

**I. Tick (✓) the correct answers :** **[0.5x 4= 2]**

1. The farmer saw a \_\_\_\_\_ in the apple tree.

(i) hollow

(ii) fruit

(iii) monkey

2. The moon borrows light from the \_\_\_\_\_ .

(i) twinkling stars

(ii) the sun

(iii) the planets

3. Spring water, spring water drink it by the \_\_\_\_\_.

(i) ounce

(ii) litre

(iii) millilitre

4. The \_\_\_\_\_ told everyone about the newspaper.

(i) Stork

(ii) Peacock

(iii) Owl

**II. Fill in the blanks with over or behind :** **[0.5x2=1]**

1. The boy is standing \_\_\_\_\_ the tree.

2. The dog is jumping \_\_\_\_\_ the wall.

**III. Circle the correct answers:** **[0.5x5=2.5]**

1. I has / have a car.

2. My friend has / have a pet cat.

3. My sweater is cool / warm.

4. The dog is a loyal / cunning animal.

5. The giraffe is tall / sharp.

**IV. Choose the correct doing words and complete the sentences: [0.5x3=1.5]**

( hoots, twinkling, acts)

1. The actor \_\_\_\_\_ on the stage.

2. The owl \_\_\_\_\_ angrily.

3. Stars are \_\_\_\_\_ in the sky.

**V. Tick (✓) the correct option :**

**[0.5x4=2]**

1. (Is this/Are they) a leaf?
2. (Are those/Is that ) beautiful flowers?
3. (Are these/ Is this) a glass of orange juice?
4. (Is that/ Are we) going to Kolkata?

**VI. Write ONLY ONE synonym of the given words :**

**[0.5x2=1]**

1. funny - \_\_\_\_\_
2. strong - \_\_\_\_\_

**VII. PICTURE COMPOSITION**

**[0.5X4=2]**



**Answer in ONE WORD only :**

1. Where is the girl in the picture?
2. What is she doing?
3. Write one rhyming word for 'girl'?
4. Identify the season shown in the picture?

\_\_\_\_\_

\_\_\_\_\_

\_\_\_\_\_

\_\_\_\_\_

**VIII. UNSEEN PASSAGE**

**[0.5X4=2]**

I am Nick. I went to a picnic with my family, last Sunday. My mom took snacks and water with us. We went to a famous lake. We did boating there. We enjoyed a lot.

**Fill in the blanks choosing suitable words from the passage:**

1. Nick went to a \_\_\_\_\_ with his family.
2. They did \_\_\_\_\_ at the lake.
3. Circle the DESCRIBING WORD in the sentence:  
“ We went to a famous lake.”
4. Circle the DOING WORD in the sentence:  
“ We did boating there.”

**IX. Rewrite the sentence using correct capital letters :**

**[1x2=2]**

1. the month of june is very hot. rain comes in july.

---

---

**X. Match with the meanings :**

**[0.5x4=2]**

- |            |                                      |                      |
|------------|--------------------------------------|----------------------|
| 1. ounce   | a) lifted                            | <input type="text"/> |
| 2. stout   | b) jumping                           | <input type="text"/> |
| 3. hopping | c) fat and round                     | <input type="text"/> |
| 4. raised  | d) very small quantity of something. | <input type="text"/> |

**XI. Write the home of the given animals :**

**[0.5x2=1]**

1. rabbit - \_\_\_\_\_
2. hen - \_\_\_\_\_

**XII. Write the girl names for the given boy names :**

**[0.5x2=1]**

1. uncle - \_\_\_\_\_
2. father - \_\_\_\_\_

**XIII. Make Sentences :**

**[1x4 =4]**

1. bit - \_\_\_\_\_
2. scribbled - \_\_\_\_\_
3. round - \_\_\_\_\_
4. stiff - \_\_\_\_\_

**XIV. Answer the following questions in complete sentences:**

**[2x5=10]**

Q1. How did the birds find the newspaper ?

Ans. \_\_\_\_\_

---

---

Q2. Why did the farmer decide to cut down the tree?

Ans. \_\_\_\_\_

---

---

Q3. What are the two things the moon could be full of?

Ans. \_\_\_\_\_  
\_\_\_\_\_  
\_\_\_\_\_

Q4. Why did Geppetto sell his coat?

Ans. \_\_\_\_\_  
\_\_\_\_\_  
\_\_\_\_\_

Q5. What kind of cloud was hanging over Cheekoo's head ?

Ans. \_\_\_\_\_  
\_\_\_\_\_  
\_\_\_\_\_

**XV. Write four sentences on ANY ONE :**

**[1x4=4]**

“School Bag” OR “My Country”

1. \_\_\_\_\_  
\_\_\_\_\_
2. \_\_\_\_\_  
\_\_\_\_\_
3. \_\_\_\_\_  
\_\_\_\_\_
4. \_\_\_\_\_  
\_\_\_\_\_

**XVI. Who said to whom:**

**[1x2=2]**

1. “I shall not cut down this tree. It is your home.”

Ans. \_\_\_\_\_

2. “ Do not throw the banana peel on the road.”

Ans. \_\_\_\_\_



# DELHI PUBLIC SCHOOL

SAIL Township, Ranchi

SECOND SEMESTER EXAMINATION (SESSION-2022-23)

**SUBJECT:** Mathematics

**DATE :-** 28.02.2023

**CLASS: – I Sec:-** \_\_\_\_\_

**Time:** 2 Hours

**M.O. :-** \_\_\_\_\_

**Roll no.:-** \_\_\_\_\_

**F. M. :-** 40

**NAME:-** \_\_\_\_\_

**I. Choose the correct option. (0.5x10=5)**

1. The dog jumped \_\_\_\_\_ the fence.

- a) up       b) in       c) open       d) over

2. The child is sliding \_\_\_\_\_ .

- a) up       b) above       c) on       d) down

3. Cylinder shows \_\_\_\_\_ movement on pushing.

- a) sliding       b) rolling       c) up and down       d) dipping

4. What is the shape of a football?

- a) cube       b) sphere       c) cone       d) cylinder

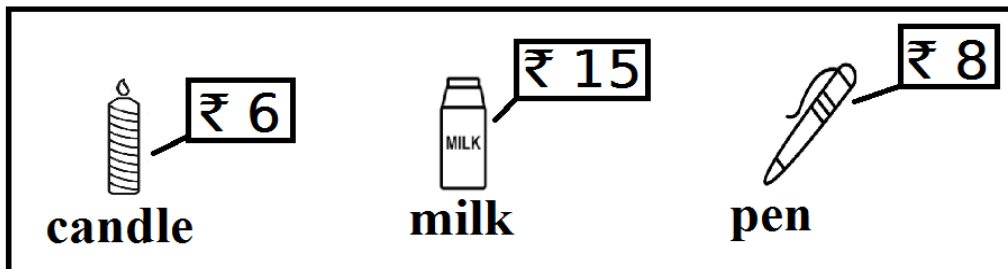
5. Which is the heaviest?

- a) an ant       b) a pencil       c) an apple       d) an elephant

6. Which is the shortest?

- a) ruler       b) sharpner       c) a pencil       d) a book

7. Sachin has ₹ 20 with him. Which two things can he buy?



- a) candle and milk       b) milk and pen   
c) candle and pen       d) none of these

8. The sixth day of the week is \_\_\_\_\_.

- a) Wednesday       b) Thursday       c) Friday       d) Saturday

9. \_\_\_\_\_ is the last month of the year.

- a) September       b) October       c) November       d) December

10. ₹ 7 + ₹ 3 = ₹

- a) ₹ 7       b) ₹ 13       c) ₹ 10       d) ₹ 6

**II. Fill in the blanks :-**

**(0.5x10=5)**

1) An oval has \_\_\_\_\_ corners.

2) Six more than 75 is \_\_\_\_\_.

3) The roman numeral of 12 is \_\_\_\_\_.

4) The roman numeral of 20 is \_\_\_\_\_.

5) The roman numeral of \_\_\_\_\_ is XIV.

6) The roman numeral of \_\_\_\_\_ is XIX.

7) Taking away 4 from 74 gives \_\_\_\_\_ tens.

8) \_\_\_\_\_ comes before Wednesday.

9) A square has \_\_\_\_\_ sides.

10) When we write  $2+2+2+2$  in multiplication, we will write it as  $2 \times$  \_\_\_\_\_.

**III. Fill in:-**

**(0.5x4=2)**

a)  $6 \times 8 =$  \_\_\_\_\_


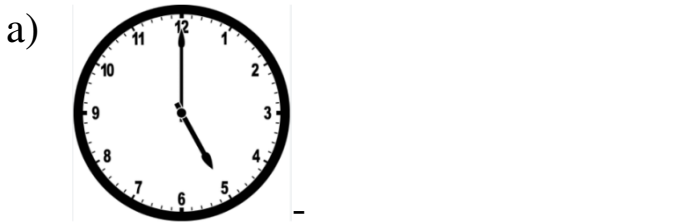
c)  $8 \times 4 =$  \_\_\_\_\_

b)  $7 \times 2 =$  \_\_\_\_\_

d)  $9 \times 9 =$  \_\_\_\_\_

**IV. Write the time shown by each of the following clocks :-**

**(0.5x2=1)**



**V. Fill in the blanks by following the patterns :-**

**(0.5x8=4)**

a) A, B, B, A, \_\_\_\_\_, \_\_\_\_\_

b) ?, =, X, ?, \_\_\_\_\_, \_\_\_\_\_

c) 3, 6, 9, 12, \_\_\_\_\_, \_\_\_\_\_

d) ↑, →, ↓, ←, ↑, \_\_\_\_\_, \_\_\_\_\_

**VI. Write the number names :-**

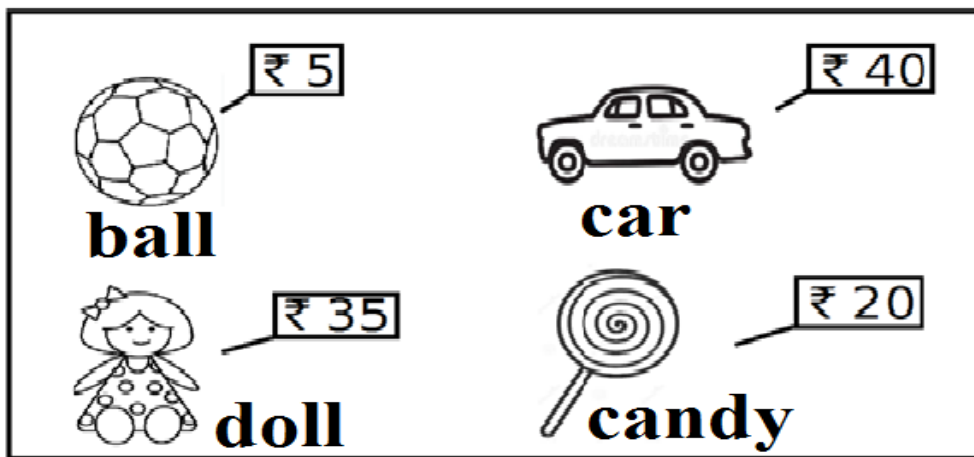
**(1x5=5)**

- a) 351 - \_\_\_\_\_
- b) 498 - \_\_\_\_\_
- c) 364 - \_\_\_\_\_
- d) 444 - \_\_\_\_\_
- e) 500 - \_\_\_\_\_

**VII. Look at the price of the articles and answer the following questions :**

**Note: Also show the calculations done.**

**(1+1+2=4)**



a) Which toy is the costliest? (1)

\_\_\_\_\_

b) Which toy is the cheapest ? (1)

\_\_\_\_\_

c) Your mother gave you a ₹ 100 note. You purchased one doll and one car. How much money will the shopkeeper return? (2)

\_\_\_\_\_  
\_\_\_\_\_  
\_\_\_\_\_

**VIII. Subtract:**

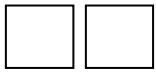
**(1.5x4=6)**

$$\begin{array}{r} \square \square \\ \text{a) } 5 \quad 7 \\ - 3 \quad 9 \\ \hline \end{array}$$

\_\_\_\_\_

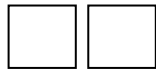
$$\begin{array}{r} \square \square \\ \text{b) } 9 \quad 0 \\ - 5 \quad 8 \\ \hline \end{array}$$

\_\_\_\_\_



c)  $5 \quad 5$

$$\begin{array}{r} - 2 \quad 7 \\ \hline \\ \hline \end{array}$$



d)  $8 \quad 1$

$$\begin{array}{r} - 1 \quad 9 \\ \hline \\ \hline \end{array}$$

**IX. Solve the Word Problems with statements:**

**(3+1=4)**

a) A fruit seller had 73 apples. He sold 18 apples and threw away 5 rotten apples. How many apples are left with him? (3)

---

---

---

---

---

---

---

---

b) Kanta had 65 paise. She gave 30 paise to her brother. How much money is left with Kanta ? (1)

---







---

---

---

**X. Mom wants to make a fruits salad. Look at the fruits kept in the given order and answer each question.**

**(1 x 4 = 4)**

					
Banana	Peach	Orange	Pear	Apple	watermelon

- Which fruit would Mom pick second? \_\_\_\_\_
- Write in ordinal number the position of the apple. \_\_\_\_\_
- The pear is \_\_\_\_\_ in order. \_\_\_\_\_
- Which fruit would Mom pick sixth? \_\_\_\_\_





# DELHI PUBLIC SCHOOL

SAIL Township, Ranchi

SECOND SEMESTER (SESSION-2022-23)

**SUBJECT:** General Knowledge

**DATE :-** 17.02.2023

**CLASS: – I Sec:-** \_\_\_\_\_

**Time: 1 Hour**

**M.O. :-** \_\_\_\_\_

**Roll no.:-** \_\_\_\_\_

**F. M. :- 25**

**NAME:-** \_\_\_\_\_

**I. Tick the correct options:**

**[0.5 x 12 =6]**

- 1) The leaves of a plant are also called?  
a) bed       b) fruit       c) kitchen of the plant
- 2) We should keep our nails \_\_\_\_\_.  
a) short and clean       b) big and dirty       c) short and dirty
- 3) Full form of CPU is \_\_\_\_\_.  
a) Central Progress Unit   
b) Central Process Unit   
c) Central Processing Unit
- 4) We clean our room with the help of \_\_\_\_\_.  
a) vacuum cleaner       b) iron       c) refrigerator
- 5) Which of the following animals has a mane?  
a) fish       b) horse       c) snake
- 6) Which of the following animals has a hump on its back?  
a) zebra       b) dog       c) camel
- 7) Mary had a little lamb, its fleece was white as \_\_\_\_\_.  
a) snow       b) cloud       c) ice-cream
- 8) What does the white colour of our flag stand for?  
a) milk       b) anger       c) peace and unity
- 9) \_\_\_\_\_ is the largest country of the world.  
a) Russia       b) India       c) Australia
- 10) \_\_\_\_\_ is a board game for 2 or 4 players and is played by rolling the dice.  
a) Cricket       b) Ludo       c) Badminton
- 11) Our national flower is \_\_\_\_\_.  
a) Sunflower       b) Rose       c) Lotus
- 12) The T.V. screen of the computer is called a \_\_\_\_\_.  
a) monitor       b) mouse       c) printer

**II. Fill in the blanks using the help box:**

**[1 x 5 =5]**

stars	Football	Lion capital of Asoka	Holi	Ostrich
-------	----------	-----------------------	------	---------

1. \_\_\_\_\_ is the largest bird but it cannot fly.
2. National Emblem of India is the \_\_\_\_\_.
3. \_\_\_\_\_ is called the festival of colours.
4. \_\_\_\_\_ is a team game which is played by kicking a ball to score a goal.
5. At night the \_\_\_\_\_ twinkle like tiny bulbs. We cannot count them.

**P.T.O.**

**III. Read the clues and write the correct names using the help box:**

[1x 3 = 3]

**Piano      Valley      Mr Narendra Modi**

1. I am the lower area between two mountains or hills. I am 'V' shaped.
2. I am known as the 'king of musical instruments'. I have 52 white keys and 36 black keys.
3. I am the 15<sup>th</sup> Prime Minister of India.

**IV. Write 'T' for True and 'F' for False:**




[0.5 x 4 = 2]

1. A smart phone is called smart because it is kept in a beautiful cover.
2. Usain Bolt runs very fast.
3. A piece of land that has water on all sides is called desert.
4. Mother Teresa was a famous Indian sports person.

**V. Identify and name the following:**

[1x 3 = 3]

**MOUNTAIN      CINDERELLA      RED FORT**

- 1)  - \_\_\_\_\_
- 2)  - \_\_\_\_\_
- 3)  - \_\_\_\_\_

**VI. Match the column:**

[0.5 x 3 = 1.5]

1. The game of table-tennis is also called? Earth
2. A planet which is home for all living creatures. Root
3. Part of a plant that absorbs water from the soil. Ping-pong

**VII. Answer the following questions in full sentences:**

[1.5 x 3 = 4.5]

Q1. Who is called the 'Missile Man of India'?

Ans. \_\_\_\_\_  
\_\_\_\_\_

Q2. Which country is known as the 'Land of the Rising Sun'?

Ans. \_\_\_\_\_  
\_\_\_\_\_

Q3. "Sun" is the part of which galaxy?

Ans. \_\_\_\_\_  
\_\_\_\_\_



# DELHI PUBLIC SCHOOL

SAIL Township, Ranchi

SECOND SEMESTER EXAMINATION (SESSION-2022-23)

**SUBJECT:** Computer

**DATE :-** 15.02.2023

**CLASS: – I Sec:-** \_\_\_\_\_

**Time: 1 Hour**

**M.O. :-** \_\_\_\_\_

**Roll no.:-** \_\_\_\_\_

**F. M. :-** 20

**NAME:-** \_\_\_\_\_

**Q1) Choose the most correct alternatives: - [0.5X4=2]**

- a) \_\_\_\_\_ means to move an object from one place to another.  
 i) Click  ii) Drag  iii) Double click  iv) Right click
- b) \_\_\_\_\_ key is used to give space between two letters or words.  
 i) Capslock  ii) Spacebar  iii) Delete  iv) Enter
- c) \_\_\_\_\_ means to press the left button of the mouse two times.  
 i) Click  ii) Double click  iii) Single click  iv) Drag
- d) \_\_\_\_\_ looks similar to a DVD.  
 i) Hard Disk  ii) Memory card  iii) Pen drive  iv) CD

**Q2) Fill in the blanks with the correct option:- [1X5=5]**

[ Memory card, index, cursor, Enter, Delete]

- a) Pointer is also known as \_\_\_\_\_.
- b) Keep your \_\_\_\_\_ finger on the left button of the mouse.
- c) \_\_\_\_\_ key is used to erase letters from forward direction.
- d) \_\_\_\_\_ key helps to bring the cursor to the next line.
- e) \_\_\_\_\_ is a small sized storage device used in cameras and mobile phones.

**Q3) Write True or False:- [0.5X4=2]**

- a) The capacity of a DVD is less than a CD. \_\_\_\_\_
- b) A mouse has four buttons on it. \_\_\_\_\_
- c) A pen drive looks similar to a hard disk. \_\_\_\_\_
- d) We can select an item by clicking on that item. \_\_\_\_\_

**Q4) Write full form of these:- [1X2=2]**

- a) CPU - \_\_\_\_\_
- b) CD - \_\_\_\_\_

**Q5) Solve the riddles:- [1X2=2]**

- a) We are four brothers, each going in different direction. Who are we ?  
 \_\_\_\_\_
- b) I am a storage device whose initial word is the same as a commonly used writing device.  
 \_\_\_\_\_

**Q6) Match the following keys with their numbers:-**

**[0.5X2=2]**

- |                  |         |                      |
|------------------|---------|----------------------|
| a) Alphabet keys | i) 10   | <input type="text"/> |
| b) Spacebar key  | ii) 2   | <input type="text"/> |
| c) Enter keys    | iii) 26 | <input type="text"/> |
| d) Numbers keys  | iv) 1   | <input type="text"/> |

**Q7) Answer the following questions:-**

**[2X2=4]**

a) Write any two uses of mouse.

i) \_\_\_\_\_

ii) \_\_\_\_\_

b) Define mouse.

\_\_\_\_\_

\_\_\_\_\_

\_\_\_\_\_

\_\_\_\_\_

**Q8) Draw Pen drive and colour it .**

**[1]**